

Constable (GD) in CAPFs, NIA, SSF and Rifleman (GD) in Assam Rifles Examination, 2018

Roll No. :	www.examstocks.com
Registration No.	www.examstocks.com
Name :	www.examstocks.com
Exam Venue :	ION Digital Zone iDZ 2 Mathura Road
Exam Time :	9:00 AM - 10:30 AM
Exam Date :	13/02/2019

Section : General Section

Q.1 Select the option that is related to the third term in the same way as the second term is related to the first term.

Mouse : Rodent :: Bee : ?

- Ans
- 1. Drone
 - 2. Insect
 - 3. Reptile
 - 4. Bird

Question ID : 9895802702
Chosen Option : 1

Q.2 Seven friends O, P, Q, R, S, T and U are watching a movie sitting in a row. S is sitting at one extreme end. Q is sitting second to the right of S. P is sitting between O and Q. U is not sitting at any extreme end. R is sitting to the left of T. Who is sitting in the middle?

- Ans
- 1. R
 - 2. Q
 - 3. P
 - 4. U

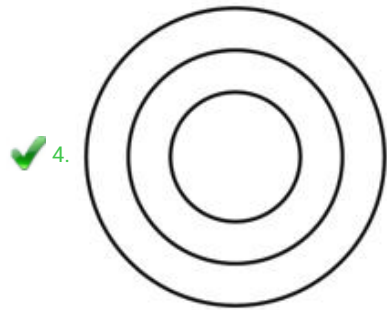
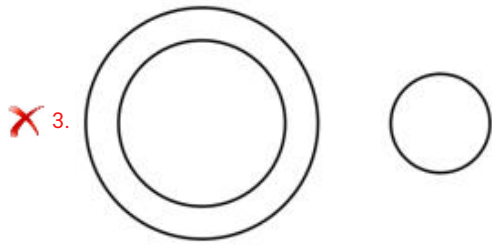
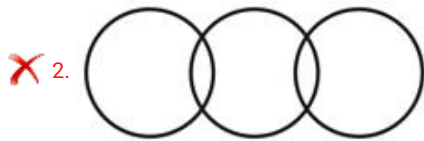
Question ID : 9895802707
Chosen Option : 3

Q.3 Select the Venn diagram that best represents the given set of classes:

Udaipur, Rajasthan, India

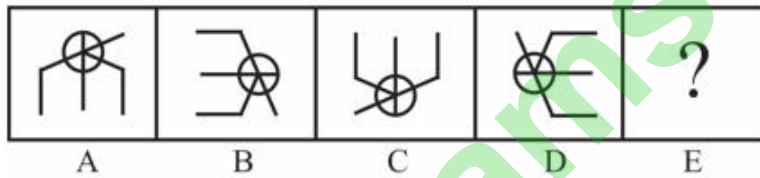
Ans



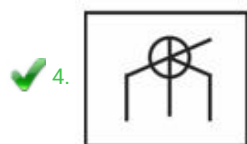
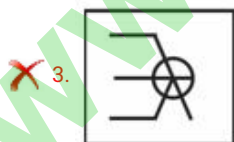
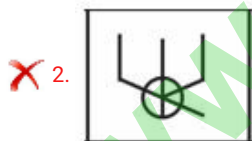
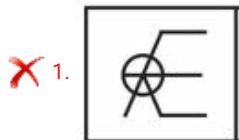


Question ID : 9895802723
Chosen Option : 4

Q.4 Choose the option that would follow next in the given figure series.



Ans



Question ID : 9895802718
Chosen Option : 4

Q.5 Select the option that will correctly replace the question mark (?) in the series.

4, 16, 28, 40, ?

- Ans
- 1. 69
 - 2. 52
 - 3. 51
 - 4. 56

Question ID : 9895802712
Chosen Option : 2

Q.6 A square transparent sheet with a pattern is given. How will the pattern appear when the transparent sheet is folded along the dotted line?




- Ans
- 1.
 - 2.
 - 3.
 - 4.

Question ID : 9895802722
Chosen Option : 4

Q.7 Select a figure from amongst the four alternatives that when placed in the blank space (?) of figure X will complete the pattern. (Rotation is not allowed).



- Ans
- 1.
 - 2.
 - 3.



Question ID : 9895802719
Chosen Option : 2

Q.8 Select the option that is related to the third number in the same way as the second number is related to the first number.

11: 225 :: 14: ?

- Ans
- 1. 169
 - 2. 324
 - 3. 144
 - 4. 225

Question ID : 9895802714
Chosen Option : 4

Q.9 Choose the option in which the figure marked 'X' is embedded. (Rotation is not allowed)



- Ans
- 1.
 - 2.
 - 3.
 - 4.

Question ID : 9895802720
Chosen Option : 4

Q.1 Select the option that is related to the third term in the same way as the second term is related to the first term.

0

Unhappy : Sad :: Speak : ?

- Ans
- 1. Shout
 - 2. Desire

- 3. Ask
- 4. Listen

Question ID : 9895802703
Chosen Option : 1

Q.1 The statements below are followed by two conclusions labeled I and II. Assuming that the information in the statements is true, even if it appears at variance with generally established facts, decide which conclusion (s) logically and definitely follow (s) from the information given in the statements.

Statements:

- 1) All hens are lions.
- 2) All lions are cats.

Conclusion

- I. All cats are hens.
- II. Some cats are hens.

- Ans**
- 1. Only conclusion I follows.
 - 2. Only conclusion II follows.
 - 3. Either conclusion I or conclusion II follows.
 - 4. Both conclusions follow.

Question ID : 9895802710
Chosen Option : 2

Q.1 In a certain code, SCIENTIST is written as TSITNEISC. How will GOLDSMITH be written in that code?

- 2**
- Ans**
- 1. HTIMSDLOG
 - 2. HTISMDLGO
 - 3. HTIMSDLGO
 - 4. HITMSDLOG

Question ID : 9895802705
Chosen Option : 1

Q.1 Choose the option that most closely resembles the mirror image of the given word when mirror is placed at right side.

- 3**
- CAPSIZE
- Ans**
- 1. CAPSIZE
 - 2. CVPZIE
 - 3. CAPZIE
 - 4. CVPZIE

Question ID : 9895802721
Chosen Option : 3

Q.1 Select the option that will correctly replace the question mark (?) in the given pattern.

4

13	22	12
117	?	132
9	7	11

- Ans
- 1. 117
 - 2. 154
 - 3. 165
 - 4. 119

Question ID : 9895802716
Chosen Option : 2

Q.1 Select the option that will correctly replace the question mark (?) in the series.

5

OJY, MLW, KNU, IPS, ?

- Ans
- 1. GRQ
 - 2. GRP
 - 3. GPO
 - 4. GRR

Question ID : 9895802699
Chosen Option : 1

Q.1 Eight friends A, B, C, D, E, F, G and H are sitting around a circular table facing each other for a lunch. A is opposite F and third to the right of B. G is between F and D. H is to the left of D. E is between C and A. Who is sitting opposite C?

6

- Ans
- 1. D
 - 2. F
 - 3. B
 - 4. A

Question ID : 9895802708
Chosen Option : 1

Q.1 Choose the odd one out of the given options.

7

- Ans
- 1. MIF
 - 2. RGC
 - 3. DPR
 - 4. EFQ

Question ID : 9895802700
Chosen Option : 3

Q.1 J, K, L, M, N and O are six teachers. Each one teaches a different subject out of Hindi, English, Math, Science, Social Science and Arts, not necessarily in the same order. Each of them teaches on only one day, from Monday to Saturday, not necessarily in the same order. J teaches Arts on Saturday. L teaches neither English nor Social Science, but he teaches on Thursday. Wednesday is reserved for Maths taught by K. O teaches Science a day before N. Social Science is taught a day before Arts. Which subject is taught by N?

- Ans
- 1. Arts
 - 2. Hindi
 - 3. English
 - 4. Science

Question ID : 9895802709
Chosen Option : 3

Q.1 Select the option that will correctly replace the question mark (?) in the series.

9, 10, 18, 45, ?

- Ans
- 1. 107
 - 2. 111
 - 3. 109
 - 4. 110

Question ID : 9895802713
Chosen Option : 3

Q.2 Find out the two signs to be interchanged to make the following equation correct.

$$13 + 26 \times 2 - 5 \div 3 = 11$$

- Ans
- 1. - and \div
 - 2. \times and \div
 - 3. + and -
 - 4. - and \times

Question ID : 9895802717
Chosen Option : 2

Q.2 दिए गए विकल्पों में से असंगत का चयन करें।

- Ans
- 1. लहसुन
 - 2. अदरक
 - 3. आलू
 - 4. टमाटर

Question ID : 9895802701
Chosen Option : 4

Q.2 The statements below are followed by two conclusions labeled I and II. Assuming that the information in the statements is true, even if it appears at variance with generally established facts, decide which conclusion(s) logically and definitely follow(s) from the information given in the statements.

Statements:

- 1) Some men are insects.
- 2) Some larvae are insects.

Conclusion

- I. Some insects are larvae.
- II. Some insects are men.

- Ans
1. Only conclusion I follows.
 2. Both conclusions follow.
 3. Only conclusion II follows.
 4. Neither conclusion I nor conclusion II follows.

Question ID : 9895802711

Chosen Option : 2

Q.2 Select the option that is related to the third term in the same way as the second term is related to the first term.

BAC : GFH :: LKM : ?

- Ans
1. QRP
 2. QPR
 3. QOP
 4. QPO

Question ID : 9895802704

Chosen Option : 2

Q.2 Choose the odd number out of the given options.

- Ans
1. 109
 2. 561
 3. 127
 4. 307

Question ID : 9895802715

Chosen Option : 2

Q.2 In a certain code, REFUSE is written as 74. How will KIDNAP be written in that code?

- Ans
1. 59
 2. 55
 3. 54
 4. 57

Question ID : 9895802706
Chosen Option : 2

Q.2
6 Which of the following festivals is associated with the 'Vaman' incarnation of Vishnu?

- Ans
- 1. Kumbha
 - 2. Bihu
 - 3. Onam
 - 4. Janmashtami

Question ID : 9895802551
Chosen Option : 4

Q.2
7 As of February 2019, who is the current Vice-Chairman of Niti Aayog?

- Ans
- 1. Shaktikanta Das
 - 2. Rajiv Kumar
 - 3. Shakti Sinha
 - 4. Urjit Patel

Question ID : 9895802554
Chosen Option : 2

Q.2
8 The Indian constitution declares India as:

- Ans
- 1. a Federation of States
 - 2. a Confederation of States
 - 3. a Union of States
 - 4. a Association of States

Question ID : 9895802560
Chosen Option : 3

Q.2
9 Which of the following is NOT a determinant of the patterns of drainage system?

- Ans
- 1. Climatic conditions of the area
 - 2. Source of the drainage system
 - 3. Underlying rock structure
 - 4. Slope of the land

Question ID : 9895802570
Chosen Option : 2

Q.3
0 In the context of Sufi tradition, the term 'khanqah' stood for:

- Ans
- 1. the Hell
 - 2. a graveyard

- 3. a hospice
- 4. the Heaven

Question ID : 9895802572
Chosen Option : 3

Q.3
1 Which of the following is NOT true about nuclear fusion?

- Ans
- 1. It produces much more energy than nuclear fission.
 - 2. The process is used for making nuclear bomb.
 - 3. Electricity production through this process is commercially less viable than nuclear fission.
 - 4. It is the source of energy in the stars.

Question ID : 9895802565
Chosen Option : 3

Q.3
2 Which of the following pair is NOT correctly matched?

- Ans
- 1. Magnesium hydroxide – $MgOH_2$
 - 2. Sulphuric acid – H_2SO_4
 - 3. Ammonium hydroxide – NH_4OH
 - 4. Nitric acid – HNO_3

Question ID : 9895802567
Chosen Option : 3

Q.3
3 Which of the following money transfer systems allows 24×7×365 transfer of money?

- Ans
- 1. IMPS
 - 2. Cheque
 - 3. NEFT
 - 4. RTGS

Question ID : 9895802558
Chosen Option : 1

Q.3
4 Which of the following is NOT an artificial ecosystem?

- Ans
- 1. Reservoir of a dam
 - 2. Paddy-field
 - 3. Forest
 - 4. Garden

Question ID : 9895802564
Chosen Option : 3

Q.3
5 Which of the followings has been dubbed as 'India's maiden human spaceflight programme'?

- Ans
- 1. Mangalyaan – II
 - 2. Gaganyaan
 - 3. Chandrayaan – II
 - 4. Aditya L – 1

Question ID : 9895802555
Chosen Option : 4

Q.3
6 Which of the followings was NOT a Harappan city?

- Ans
- 1. Lothal
 - 2. Dholavira
 - 3. Mehrgarh
 - 4. Sotkakah

Question ID : 9895802573
Chosen Option : 1

Q.3
7 _____ was awarded the Noble Peace Prize 2018.

- Ans
- 1. Nadia Murad
 - 2. Kazuo Ishiguro
 - 3. James P. Allison
 - 4. Donna Strickland

Question ID : 9895802556
Chosen Option : 1

Q.3
8 Which Indian cricketer topped the MRF Tyres ICC Test Player Rankings at the year-end after 2018?

- Ans
- 1. Virat Kohli
 - 2. Ajinkya Rahane
 - 3. Cheteshwar Pujara
 - 4. Ravindra Jadeja

Question ID : 9895802553
Chosen Option : 1

Q.3
9 Which of the following turns Blue litmus Red?

- Ans
- 1. Vinegar
 - 2. Lime Water
 - 3. Baking Soda
 - 4. Milk

Question ID : 9895802566
Chosen Option : 4

Q.4
0 Bhimbetka, a world heritage site, is known for:

- Ans
- 1. Ashokan Pillar
 - 2. prehistoric rock shelters
 - 3. monolithic temples
 - 4. Buddhist stupas

Question ID : 9895802549
Chosen Option : 3

Q.4
1 Which of the following statements is NOT correct about myopia?

- Ans
- 1. The vision may be corrected with the help of concave lens.
 - 2. It is also known as near sightedness.
 - 3. In the affected eye, the image of a distant object is formed beyond the retina.
 - 4. The person affected by it cannot see beyond few metres.

Question ID : 9895802563
Chosen Option : 3

Q.4
2 What is 'Bringa' in Orissa?

- Ans
- 1. A village known for diamond mines
 - 2. A stone weapon used by the aboriginals
 - 3. An edible oil used by the aboriginals
 - 4. A local name of 'slash and burn' agriculture

Question ID : 9895802568
Chosen Option : 4

Q.4
3 Which of the following options is also termed as the third-tier of democracy in India?

- Ans
- 1. State government
 - 2. Union Territory governments
 - 3. Local-self government
 - 4. Supreme Court

Question ID : 9895802561
Chosen Option : 3

Q.4
4 Which of the following rulers built the mosque called 'Adhai-din-ka-Jhonpra'?

Ans

- 1. Balban
- 2. Abraham Lodi
- 3. Iltutmish
- 4. Qutub-ud-Din-Aibak

Question ID : 9895802550
Chosen Option : 4

Q.4
5 Which of the following constitutional amendments provided for the Right to Education?

- Ans
- 1. 88th amendment
 - 2. 89th amendment
 - 3. 87th amendment
 - 4. 86th amendment

Question ID : 9895802562
Chosen Option : 4

Q.4
6 Which of the following institutions is responsible for regulating the formal sources of credit in India?

- Ans
- 1. RBI
 - 2. TRAI
 - 3. NABARD
 - 4. IRDA

Question ID : 9895802559
Chosen Option : 1

Q.4
7 Which of the following organizations received the Maulana Abul Kalam Azad (MAKA) Trophy 2017-18?

- Ans
- 1. JSW Sports
 - 2. Isha Outreach
 - 3. Rashtriya Ispat Nigam Limited
 - 4. Guru Nanak Dev University

Question ID : 9895802552
Chosen Option : 1

Q.4
8 The Economic Survey of India is published by:

- Ans
- 1. Department of Financial Services
 - 2. Department of Economic Affairs
 - 3. Department of Revenue
 - 4. Department of Public Expenditure

Question ID : 9895802557

Chosen Option : 2

Q.4
9 During British rule in India, 'gomastha' was:

Ans ✓ 1.

a paid servant to supervise weavers, collect supplies, and examine the quality of cloth

- ✗ 2. an Indian soldier appointed as the in-charge of a cavalry
- ✗ 3. a village-level official in the revenue-department
- ✗ 4. an Indian official in the intelligence department

Question ID : 9895802571

Chosen Option : 3

Q.5
0 Which of the following rivers forms the famous Dhuadhar falls?

Ans ✓ 1. Narmada

- ✗ 2. Kali Sind
- ✗ 3. Chambal
- ✗ 4. Tapi

Question ID : 9895802569

Chosen Option : 3

Q.5
1 A sum of ₹ 8250 gives simple interest of ₹ 2475 in 5 years. What will be the rate of interest per annum?

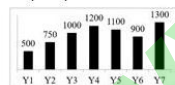
Ans ✗ 1. 7.5%

- ✗ 2. 8%
- ✓ 3. 6%
- ✗ 4. 10%

Question ID : 9895804347

Chosen Option : 3

Q.5
2 The bar chart given below shows the total exports (in ₹ 1000 crores) of a country for 7 consecutive years Y1, Y2, Y3, Y4, Y5, Y6 and Y7.



What is the average exports from years Y1 to Y7?

Ans ✗ 1. 931.45

- ✗ 2. 886.19
- ✓ 3. 964.28
- ✗ 4. 847.87

Question ID : 9895804357

Chosen Option : 3

Q.5
3 The volume of a right circular cone is equal to the volume of that right circular cylinder whose height is 27 cm and diameter of its base is 30 cm. If the height of the cone is 25 cm, then what will be the diameter of its base?

Ans ✗ 1. 24 cm

- 2. 54 cm
- 3. 27 cm
- 4. 35 cm

Question ID : 9895804353
Chosen Option : 3

Q.5 Out of 100 articles, 25 articles were sold at 25% profit and the remaining articles were sold at 25% loss. What will be the total loss percentage?

- Ans
- 1. 15
 - 2. 12.5
 - 3. 20
 - 4. 10

Question ID : 9895804343
Chosen Option : 2

Q.5 40 mechanics can repair a bike in 56 days. In how many days 32 mechanics will do the same work?

- Ans
- 1. 60 days
 - 2. 56 days
 - 3. 80 days
 - 4. 70 days

Question ID : 9895804350
Chosen Option : 4

Q.5 The average of 23, 27, 29, 36, 47 and x is 35. What is the value of x?

- Ans
- 1. 45
 - 2. 52
 - 3. 48
 - 4. 39

Question ID : 9895804338
Chosen Option : 3

Q.5 Tap K can fill a tank in 8 hours and tap L can fill the same tank in 20 hours. In how many hours both tap K and L together can fill the same tank?

- Ans
- 1. 20/3 hours
 - 2. 60/11 hours
 - 3. 18/5 hours
 - 4. 40/7 hours

Question ID : 9895804349
Chosen Option : 4

Q.5

8 Selling price of first article is ₹ 960 and cost price of second article is ₹ 960. If there is a profit of 20% on first article and loss of 20% on second article, then, what will be the total loss?

- Ans
- 1. ₹ 36
 - 2. ₹ 24
 - 3. ₹ 20
 - 4. ₹ 32

Question ID : 9895804342

Chosen Option : 4

Q.5 Neeraj covers two distances of 10 km and 20 km in 1 hour and 5 hours respectively. What will be the average speed of

9 Neeraj for the whole journey?

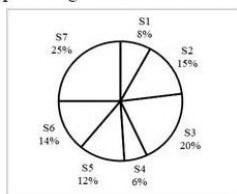
- Ans
- 1. 4 km/hr
 - 2. 7 km/hr
 - 3. 5 km/hr
 - 4. 6 km/hr

Question ID : 9895804351

Chosen Option : 2

Q.6 The pie chart given below shows the annual snowfall received by 7 states of a country. The snowfall is shown as a

0 percentage of total annual snowfall of the country.



If the annual snowfall received by the country is 700 cm. What is the difference in the annual snowfalls of S3 and S2?

- Ans
- 1. 42 cm
 - 2. 7 cm
 - 3. Cannot be determined
 - 4. 35 cm

Question ID : 9895804356

Chosen Option : 4

Q.6
1 What is the value of $\left(2000 \div \frac{1}{2} \text{ of } \frac{25}{2} \times \frac{5}{2} \text{ of } \frac{4}{25} - 5\right)$?

- Ans
- 1. 121
 - 2. 123
 - 3. 122
 - 4. 126

Question ID : 9895804335

Chosen Option : 4

Q.6 A motorcycle is moving at the speed of 25 km/hr and its speed is increased by 7 km/hr at the end of each hour. How

2 much time it will take to cover a distance of 225 km?

- Ans
- 1. 11/2 hr
 - 2. 7 hr
 - 3. 13/2 hr
 - 4. 6 hr

Question ID : 9895804352
Chosen Option : 1

- Q.6
3 What is the mode of the given data?
21, 22, 23, 23, 24, 21, 22, 23, 21, 23, 24, 23, 21, 23

- Ans
- 1. 23
 - 2. 21
 - 3. 22
 - 4. 24

Question ID : 9895804340
Chosen Option : 2

- Q.6
4 A sum of ₹ 10500 becomes ₹ 17745 in 2 years at the rate of compound interest. If the interest is compounded annually, then what will be the rate of interest?

- Ans
- 1. 40%
 - 2. 30%
 - 3. 25%
 - 4. 20%

Question ID : 9895804348
Chosen Option : 2

- Q.6
5 The average monthly salary of 30 employees and 5 managers is ₹ 80000. One manager with salary ₹ 180000 is replaced by a new manager. If the average monthly salary now becomes ₹ 78500, then what is the monthly salary of the new manager?

- Ans
- 1. ₹ 142500
 - 2. ₹ 132000
 - 3. ₹ 127500
 - 4. ₹ 154500

Question ID : 9895804337
Chosen Option : 1

- Q.6
6 Height of a right circular cone is 8 cm. If diameter of its base is 12 cm, then what will be the curved surface area of the cone?

- Ans
- 1. $1056/7 \text{ cm}^2$
 - 2. $1320/7 \text{ cm}^2$
 - 3. $1440/7 \text{ cm}^2$
 - 4. $2112/7 \text{ cm}^2$

Question ID : 9895804354

Chosen Option : 2

Q.6 The ratio of the areas of two triangles is 1 : 2 and the ratio of their bases is 3 : 4. What will be the ratio of their height?

7

- Ans
- 1. 1 : 3
 - 2. 4 : 3
 - 3. 2 : 1
 - 4. 2 : 3

Question ID : 9895804355

Chosen Option : 4

Q.6 A bag has ₹ 840 in the denomination of ₹ 1, ₹ 2 and ₹ 5 coins. ₹ 1, ₹ 2 and ₹ 5 coins are in the ratio of 8 : 1 : 5. How

8

many coins of ₹ 5 are in the bag?

- Ans
- 1. 60
 - 2. 24
 - 3. 600
 - 4. 120

Question ID : 9895804345

Chosen Option : 4

Q.6 What is the value of $\left(11 \div 4 - \frac{2}{3} \text{ of } \frac{9}{8} + 11\right)$?

9

- Ans
- 1. 13
 - 2. 11
 - 3. 15
 - 4. 17

Question ID : 9895804336

Chosen Option : 1

Q.7 The Least Common Multiple and Highest common Factor of two numbers are 30 and 5 respectively. If their sum is 25,

0

then what will be the difference of these two numbers?

- Ans
- 1. 15
 - 2. 10
 - 3. 25
 - 4. 5

Question ID : 9895804334

Chosen Option : 4

Q.7 A shopkeeper sells a cooler at a discount of 15%. If he gives a discount of 19%, then he earns ₹ 332 less. What will be

1

the marked price of the cooler?

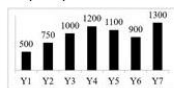
- Ans
- 1. ₹ 8100
 - 2. ₹ 8300
 - 3. ₹ 8700

4. ₹ 8200

Question ID : 9895804339

Chosen Option : 2

Q.7 The bar chart given below shows the total exports (in ₹ 1000 crores) of a country for 7 consecutive years Y1, Y2, Y3, Y4, Y5, Y6 and Y7.



What is the ratio of the exports of year with lowest exports and the year with second highest exports?

- Ans
- 1. 9 : 12
 - 2. 5 : 12
 - 3. 9 : 13
 - 4. 5 : 11

Question ID : 9895804358

Chosen Option : 2

Q.7 If X is 80% more than Y , then Y is how much percentage less than X ?

- Ans
- 1. 61.33%
 - 2. 80%
 - 3. 33.33%
 - 4. 44.44%

Question ID : 9895804341

Chosen Option : 4

Q.7 P, Q and R invest sum in the ratio of 7 : 4 : 9 respectively. If they earned total profit of ₹ 6680 at the end of year, then what is the total share of P and Q together?

- Ans
- 1. ₹ 4868
 - 2. ₹ 4254
 - 3. ₹ 4124
 - 4. ₹ 3674

Question ID : 9895804346

Chosen Option : 4

Q.7 K, L and M invest sum in the ratio of 15 : 20 : 27 respectively. If they earned total profit of ₹ 10230 at the end of year, then what is the difference between share of K and L?

- Ans
- 1. ₹ 1155
 - 2. ₹ 1275
 - 3. ₹ 1980
 - 4. ₹ 825

Question ID : 9895804344

Chosen Option : 4

Section : English Language

Q.1 Select the most appropriate meaning of the underlined idiom in the given sentence.

My views are totally in harmony with my brother's views.

- Ans
- 1. according to
 - 2. in favor of
 - 3. different from
 - 4. in agreement with

Question ID : 9895804238
Chosen Option : 4

Q.2 Select the most appropriate ANTONYM of the given word.

ATTRACTED

- Ans
- 1. Repelled
 - 2. Enchanted
 - 3. Transformed
 - 4. Disturbed

Question ID : 9895804236
Chosen Option : 1

Q.3 Select the most appropriate word to fill in the blank.

My sister _____ a cat and brought it home.

- Ans
- 1. assumed
 - 2. adapted
 - 3. adopted
 - 4. approved

Question ID : 9895804244
Chosen Option : 3

Q.4 Select the most appropriate option to substitute the underlined segment in the given sentence. If there is no need to substitute it, select No improvement.

The sound of the sea waves became gradually weaker over the time.

- Ans
- 1. sounds of the sea wave
 - 2. sound from sea waves
 - 3. No improvement
 - 4. sound with the sea waves

Question ID : 9895804252
Chosen Option : 3

Q.5 Select the most appropriate option to substitute the underlined segment in the given sentence. If there is no need to substitute it, select No improvement.

Sivagami longed to touch the chisel but her grandfather chase her away.

- Ans
- 1. chased it away
 - 2. chased her away
 - 3. No improvement
 - 4. had chased them away

Question ID : 9895804251
Chosen Option : 2

Q.6 Identify the segment in the sentence which contains the grammatical error from the given options.

I'm sorry, but I don't agree with which you just said.

- Ans
- 1. I'm sorry
 - 2. with which
 - 3. just said
 - 4. don't agree

Question ID : 9895804247
Chosen Option : 2

Q.7 Select the most appropriate synonym of the given word.

THRIVE

- Ans
- 1. Prosper
 - 2. Promote
 - 3. Foster
 - 4. Progress

Question ID : 9895804233
Chosen Option : 3

Q.8 Select the word which means the same as the group of words given.

An act that makes you feel morally bad or ashamed.

- Ans
- 1. Displeased
 - 2. Irrational
 - 3. Disgraceful
 - 4. Ignorant

Question ID : 9895804242
Chosen Option : 3

Q.9

Select the most appropriate meaning of the given idiom.

Bone of contention

- Ans
- 1. A cause of failure
 - 2. A matter of contentment
 - 3. A highly irritable person
 - 4. A subject of dispute

Question ID : 9895804237
Chosen Option : 4

Q.1
0 Fill in the blanks with the most appropriate words.

Once the mother duck jumped _____ the pond, the ducklings followed suit.

- Ans
- 1. over
 - 2. in
 - 3. under
 - 4. into

Question ID : 9895804248
Chosen Option : 4

Q.1
1 Select the correctly spelt word.

- Ans
- 1. Thoroughfare
 - 2. Thoroughfair
 - 3. Thorowfare
 - 4. Throughfare

Question ID : 9895804240
Chosen Option : 4

Q.1
2 Select the most appropriate option to substitute the underlined segment in the given sentence. If there is no need to substitute it, select No improvement.

The ticking of the clock was the only sound to hear.

- Ans
- 1. in hearing
 - 2. No improvement
 - 3. to hear with
 - 4. to be heard

Question ID : 9895804250
Chosen Option : 4

Comprehension:

In the following passage some words have been deleted. Fill in the blanks with the help of the alternatives given. Select the most appropriate option for each number.

The trees had lost most of their leaves and their (1) _____ figures were clear against the grey sky. Bella looked up at them and could see birds (2) _____ with difficulty, (3) _____ to keep themselves in place while the wind tried to blow them (4) _____. She was walking against the wind and trying hard to push herself ahead. She resisted and strode (5) _____

SubQuestion No : 13

Q.1
3 Fill in blank (1) with the most appropriate option.

- Ans
- 1. bared
 - 2. dreary
 - 3. parched
 - 4. dried

Question ID : 9895804254

Chosen Option : 4

Comprehension:

In the following passage some words have been deleted. Fill in the blanks with the help of the alternatives given. Select the most appropriate option for each number.

The trees had lost most of their leaves and their (1) _____ figures were clear against the grey sky. Bella looked up at them and could see birds (2) _____ with difficulty, (3) _____ to keep themselves in place while the wind tried to blow them (4) _____. She was walking against the wind and trying hard to push herself ahead. She resisted and strode (5) _____

SubQuestion No : 14

Q.1
4 Fill in blank (2) with the most appropriate option.

- Ans
- 1. perching
 - 2. punching
 - 3. pouncing
 - 4. parching

Question ID : 9895804255

Chosen Option : 4

Comprehension:

In the following passage some words have been deleted. Fill in the blanks with the help of the alternatives given. Select the most appropriate option for each number.

The trees had lost most of their leaves and their (1) _____ figures were clear against the grey sky. Bella looked up at them and could see birds (2) _____ with difficulty, (3) _____ to keep themselves in place while the wind tried to blow them (4) _____. She was walking against the wind and trying hard to push herself ahead. She resisted and strode (5) _____

SubQuestion No : 15

Q.1
5 Fill in blank (3) with the most appropriate option.

- Ans
- 1. struggling
 - 2. sleeping
 - 3. sliding
 - 4. surviving

Question ID : 9895804256
Chosen Option : 1

Comprehension:

In the following passage some words have been deleted. Fill in the blanks with the help of the alternatives given. Select the most appropriate option for each number.

The trees had lost most of their leaves and their (1) _____ figures were clear against the grey sky. Bella looked up at them and could see birds (2) _____ with difficulty, (3) _____ to keep themselves in place while the wind tried to blow them (4) _____. She was walking against the wind and trying hard to push herself ahead. She resisted and strode (5) _____

SubQuestion No : 16

Q.1
6 Fill in blank (4) with the most appropriate option.

- Ans
- 1. out
 - 2. away
 - 3. up
 - 4. aside

Question ID : 9895804257
Chosen Option : 2

Comprehension:

In the following passage some words have been deleted. Fill in the blanks with the help of the alternatives given. Select the most appropriate option for each number.

The trees had lost most of their leaves and their (1) _____ figures were clear against the grey sky. Bella looked up at them and could see birds (2) _____ with difficulty, (3) _____ to keep themselves in place while the wind tried to blow them (4) _____. She was walking against the wind and trying hard to push herself ahead. She resisted and strode (5) _____

SubQuestion No : 17

Q.1
7 Fill in blank (5) with the most appropriate option.

- Ans
- 1. on
 - 2. by
 - 3. up
 - 4. in

Question ID : 9895804258
Chosen Option : 2

Q.1
8 Identify the segment in the sentence which contains the grammatical error from the given options.

As far the eye could reach, nothing could be seen except the ruined columns of an old building.

- Ans
- 1. could reach
 - 2. As far the eye
 - 3. except the
 - 4. nothing could be

Question ID : 9895804246
Chosen Option : 1

Q.1
9 Select the word which means the same as the group of words given.

That which cannot be wrong

- Ans
- 1. Irrefutable
 - 2. Inaccurate
 - 3. Infallible
 - 4. Inevitable

Question ID : 9895804241
Chosen Option : 3

Q.2
0 Select the most appropriate antonym of the given word.

BENEVOLENT

Ans

- 1. Dull
- 2. Merciless
- 3. Friendly
- 4. Injurious

Question ID : 9895804235
Chosen Option : 2

Q.2
1 Select the most appropriate word to fill in the blank.

His success in the competitive examination gave him a major _____ in his career.

- Ans
- 1. break out
 - 2. breakthrough
 - 3. break up
 - 4. breakdown

Question ID : 9895804243
Chosen Option : 2

Q.2
2 Identify the segment in the sentence which contains the grammatical error from the given options.

She always gets the better in quarrels whether it is with girls or boys.

- Ans
- 1. better in
 - 2. gets the
 - 3. it is with
 - 4. She always

Question ID : 9895804245
Chosen Option : 2

Q.2
3 Select the correctly spelt word.

- Ans
- 1. Kindergarden
 - 2. Kindergarten
 - 3. Kindargarten
 - 4. Kindergardan

Question ID : 9895804239
Chosen Option : 1

Q.2
4 Fill in the blank with the most appropriate option.

_____ in the first attempt, he did not try again.

- Ans
- 1. Being failing
 - 2. Having failed

3. Being failed

4. Having fail

Question ID : 9895804249
Chosen Option : 2

Q.2
5 Select the most appropriate synonym of the given word.

MORALE

Ans 1. Appearance

2. Attitude

3. Self-confidence

4. Reputation

Question ID : 9895804234
Chosen Option : 4

Section : Hindi Language

Q.1 रिक्त स्थान को भरने के लिए उपयुक्त शब्द का चयन करें।

ज्वर के कारण मुझे चलने पर _____ हो रही है।

Ans 1. थकावट

2. हँसी

3. खुशी

4. दुखी

Question ID : 9895803652
Chosen Option : --

Q.2 दिये गये वाक्यांश के लिए एक शब्द चुनिए।

जिसका कोई नाथ न हो

Ans 1. कुनाथ

2. अनाथ

3. हजारीनाथ

4. सनाथ

Question ID : 9895803669
Chosen Option : --

Q.3 सही वर्तनी वाले शब्द का चयन करें।

Ans

1. हिंदुत्व
 2. हिंदूत्व
 3. हिनदुत्व
 4. हीन्दूत्व

Question ID : 9895803671
Chosen Option : --

Q.4 रिक्त स्थान को भरने के लिए उपयुक्त शब्द का चयन करें।

दादा जी को बागवानी में _____ है।

- Ans 1. शोक
 2. प्रश्न
 3. रुचि
 4. नियम

Question ID : 9895803655
Chosen Option : --

Q.5 दिए गए वाक्य में रेखांकित खंड को प्रतिस्थापित करने के लिए

उपयुक्त विकल्प का चयन करें।

मेरी पेंटिंग दस हजारों में बिक गई।

- Ans 1. दसों हजारों में बिक गई।
 2. दस हजार में बिक गई।
 3. दस हजार में बिक गए।
 4. दसों हजार में बिक गई।

Question ID : 9895803650
Chosen Option : --

Q.6 दिए गए शब्द के पर्यायवाची शब्द का चयन करें।

समुद्र

- Ans 1. मेघ
 2. परिधि
 3. नीरधि
 4. परिमाण

Question ID : 9895803664

Chosen Option : --

Q.7 निम्नलिखित में से उस विकल्प का चयन करें जो ' कुँ का मँडक ' मुहावरे का अर्थ व्यक्त करता है।

- Ans
- 1. कुँ के अंदर रहने वाला मँडक
 - 2. मूर्ख
 - 3. जानी
 - 4. सीमित ज्ञान वाला

Question ID : 9895803666

Chosen Option : --

Q.8 दिये गये वाक्यांश के लिए एक शब्द चुनिए।

जिसे जाना न जा सके

- Ans
- 1. जानशील
 - 2. जानोदय
 - 3. अज्ञेय
 - 4. जिज्ञासु

Question ID : 9895803668

Chosen Option : --

Q.9 दिए गए शब्द का विलोम चुनें।

उदय

- Ans
- 1. उत्तर
 - 2. वाचाल
 - 3. अस्त
 - 4. निरस्त

Question ID : 9895803663

Chosen Option : --

Comprehension:

दिए गए अनुच्छेद में कुछ शब्द हटा दिए गए हैं। दिए गए विकल्पों की सहायता से रिक्त स्थान भरें। प्रत्येक संख्या के लिए उपयुक्त विकल्प का चयन करें।

सत्य भाषण से मनुष्य की आत्मा _____ (1) होती है। उसके मन को सुख और _____ (2) प्राप्त होती है। सत्यवादी को कभी यह भय नहीं रहता कि यदि उसकी _____ (3) खुल गई तो क्या होगा ? उसे मानसिक शांति रहती है। इसके विपरीत झूठ बोलने वाले व्यक्ति की समाज में _____ (4) होती रहती है। असत्यवादी व्यक्ति अपने स्वभाव के कारण कभी _____ (5) नहीं बोल पाता।

SubQuestion No : 10

Q.1
0 गद्यांश में संकेतित रिक्त स्थान (1) के लिए उपयुक्त शब्द होगा -

- Ans
- 1. बलवान
 - 2. दुर्बल
 - 3. समाज
 - 4. निन्दा

Question ID : 9895803657
Chosen Option : --

Comprehension:

दिए गए अनुच्छेद में कुछ शब्द हटा दिए गए हैं। दिए गए विकल्पों की सहायता से रिक्त स्थान भरें। प्रत्येक संख्या के लिए उपयुक्त विकल्प का चयन करें।

सत्य भाषण से मनुष्य की आत्मा _____ (1) होती है। उसके मन को सुख और _____ (2) प्राप्त होती है। सत्यवादी को कभी यह भय नहीं रहता कि यदि उसकी _____ (3) खुल गई तो क्या होगा ? उसे मानसिक शांति रहती है। इसके विपरीत झूठ बोलने वाले व्यक्ति की समाज में _____ (4) होती रहती है। असत्यवादी व्यक्ति अपने स्वभाव के कारण कभी _____ (5) नहीं बोल पाता।

SubQuestion No : 11

Q.1
1 गद्यांश में संकेतित रिक्त स्थान (2) के लिए उपयुक्त शब्द होगा -

- Ans
- 1. बड़ाई
 - 2. शांति
 - 3. कमी
 - 4. अशांति

Question ID : 9895803658

Chosen Option : --

Comprehension:

दिए गए अनुच्छेद में कुछ शब्द हटा दिए गए हैं। दिए गए विकल्पों की सहायता से रिक्त स्थान भरें। प्रत्येक संख्या के लिए उपयुक्त विकल्प का चयन करें।

सत्य भाषण से मनुष्य की आत्मा _____ (1) होती है। उसके मन को सुख और _____ (2) प्राप्त होती है। सत्यवादी को कभी यह भय नहीं रहता कि यदि उसकी _____ (3) खुल गई तो क्या होगा ? उसे मानसिक शांति रहती है। इसके विपरीत झूठ बोलने वाले व्यक्ति की समाज में _____ (4) होती रहती है। असत्यवादी व्यक्ति अपने स्वभाव के कारण कभी _____ (5) नहीं बोल पाता।

SubQuestion No : 12

Q.1
2 गद्यांश में संकेतित रिक्त स्थान (3) के लिए उपयुक्त शब्द होगा -

- Ans
- 1. गठरी
 - 2. लकड़ी
 - 3. पोल
 - 4. बरतन

Question ID : 9895803659

Chosen Option : --

Comprehension:

दिए गए अनुच्छेद में कुछ शब्द हटा दिए गए हैं। दिए गए विकल्पों की सहायता से रिक्त स्थान भरें। प्रत्येक संख्या के लिए उपयुक्त विकल्प का चयन करें।

सत्य भाषण से मनुष्य की आत्मा _____ (1) होती है। उसके मन को सुख और _____ (2) प्राप्त होती है। सत्यवादी को कभी यह भय नहीं रहता कि यदि उसकी _____ (3) खुल गई तो क्या होगा ? उसे मानसिक शांति रहती है। इसके विपरीत झूठ बोलने वाले व्यक्ति की समाज में _____ (4) होती रहती है। असत्यवादी व्यक्ति अपने स्वभाव के कारण कभी _____ (5) नहीं बोल पाता।

SubQuestion No : 13

Q.1
3 गद्यांश में संकेतित रिक्त स्थान (4) के लिए उपयुक्त शब्द होगा -

- Ans
- 1. पूजा
 - 2. प्रशंसा
 - 3. मजाक

✓ 4. निन्दा

Question ID : 9895803660
Chosen Option : --

Comprehension:

दिए गए अनुच्छेद में कुछ शब्द हटा दिए गए हैं। दिए गए विकल्पों की सहायता से रिक्त स्थान भरें। प्रत्येक संख्या के लिए उपयुक्त विकल्प का चयन करें।

सत्य भाषण से मनुष्य की आत्मा _____ (1) होती है। उसके मन को सुख और _____ (2) प्राप्त होती है। सत्यवादी को कभी यह भय नहीं रहता कि यदि उसकी _____ (3) खुल गई तो क्या होगा ? उसे मानसिक शांति रहती है। इसके विपरीत झूठ बोलने वाले व्यक्ति की समाज में _____ (4) होती रहती है। असत्यवादी व्यक्ति अपने स्वभाव के कारण कभी _____ (5) नहीं बोल पाता।

SubQuestion No : 14

Q.1
4 गद्यांश में संकेतित रिक्त स्थान (5) के लिए उपयुक्त शब्द होगा -

- Ans
- ✗ 1. घटिया
 - ✓ 2. सत्य
 - ✗ 3. नीचा
 - ✗ 4. बढ़िया

Question ID : 9895803661
Chosen Option : --

Q.1
5 रिक्त स्थान को भरने के लिए उपयुक्त शब्द का चयन करें।

_____ चैन से रहना चाहता हूँ।

- Ans
- ✗ 1. मैं
 - ✗ 2. वह
 - ✓ 3. आप
 - ✗ 4. तुम

Question ID : 9895803653
Chosen Option : --

Q.1
6 रिक्त स्थान को भरने के लिए उपयुक्त शब्द का चयन करें।

_____ ने अपना घोंसला बनाया।

- Ans
- ✗ 1. चीता

2. शेर
 3. कबूतर
 4. हाथी

Question ID : 9895803654
Chosen Option : --

Q.1 निम्नलिखित में से उस विकल्प का चयन करें जो ' तलवार सिर पर लटकी रहना ' मुहाबरे का अर्थ व्यक्त करता है।
7

- Ans 1. भयंकर खतरा बने रहना
 2. तलवार से खतरा हटाना
 3. तलवार साथ लेकर चलना
 4. सिर के ऊपर तलवार लटकाकर घूमना

Question ID : 9895803667
Chosen Option : --

Q.1 दिए गए वाक्य का वह भाग ज्ञात करें जिसमें कोई त्रुटि है।
8

वास्तव में ईश्वर ने सभी को स्वतन्त्रा उत्पन्न किया है।

- Ans 1. ईश्वर ने
 2. स्वतन्त्रा उत्पन्न किया है।
 3. सभी को
 4. वास्तव में

Question ID : 9895803646
Chosen Option : --

Q.1 दिए गए वाक्य का वह भाग ज्ञात करें जिसमें कोई त्रुटि है।
9

वृक्ष पूजन का हमारे जीवन का विशेष स्थान नहीं रहा।

- Ans 1. हमारे जीवन का
 2. नहीं रहा।
 3. वृक्ष पूजन का
 4. विशेष स्थान

Question ID : 9895803647
Chosen Option : --

Q.2
0

दिए गए वाक्य में रेखांकित खंड को प्रतिस्थापित करने के लिए

उपयुक्त विकल्प का चयन करें।

कई लोग उसके पीट रहे थे, वह अपना बचाव नहीं कर पा रहा था।

- Ans
- 1. उसपर पीट रहे थे,
 - 2. उसे पीट रहे थे,
 - 3. उसे पीट रहा था,
 - 4. उससे पीट रहे थे,

Question ID : 9895803651

Chosen Option : --

Q.2
1 दिए गए शब्द का विलोम चुनें।

परोक्ष

- Ans
- 1. नवागत
 - 2. पाक्षिक
 - 3. जिज्ञासु
 - 4. प्रत्यक्ष

Question ID : 9895803662

Chosen Option : --

Q.2
2 सही वर्तनी वाले शब्द का चयन करें।

- Ans
- 1. संसकार
 - 2. संस्कार
 - 3. संशकार
 - 4. संष्कार

Question ID : 9895803670

Chosen Option : --

Q.2
3 दिए गए शब्द के पर्यायवाची शब्द का चयन करें।

बादल

- Ans
- 1. घन
 - 2. घर
 - 3. आकाश
 - 4. घट

Question ID : 9895803665

Chosen Option : --

Q.2
4 दिए गए वाक्य का वह भाग ज्ञात करें जिसमें कोई त्रुटि है।

लिखित और मौखिक भाषा में सबसे बड़ा अंतर यह है कि लिखित भाषा अनुशासन की माँग करता है।

Ans

- 1. यह है कि
- 2. सबसे बड़ा अंतर
- 3. लिखित और मौखिक भाषा में
- 4. लिखित भाषा अनुशासन की माँग करता है।

Question ID : 9895803648

Chosen Option : --

Q.2
5 दिए गए वाक्य में रेखांकित खंड को प्रतिस्थापित करने के लिए उपयुक्त विकल्प का चयन करें।

चाँदी की हथकड़ी काला पड़ जाती है।

Ans

- 1. हथकड़ी कालियाँ पड़ जाती है।
- 2. हथकड़ी काली पड़ जाता है।
- 3. हथकड़ी काला पड़ जाता है।
- 4. हथकड़ी काली पड़ जाती है।

Question ID : 9895803649

Chosen Option : --